

Chapter 5 Final Exam Review

5-27. Write the inverse equation for each of the following equations.

a. $y = 3x - 8$

b. $y = \frac{1}{2}x + 6$

c. $y = \frac{x+6}{2}$

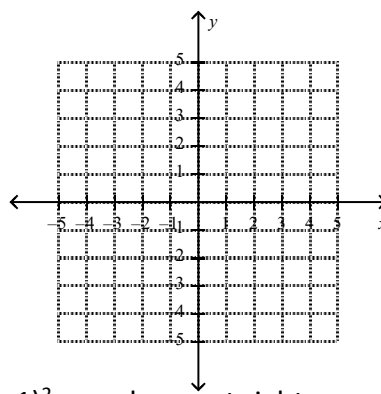
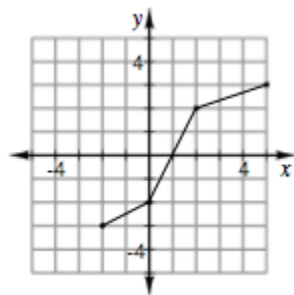
5-51. Find the inverse of each of the following functions by first switching x and y and then solving for y .

a. $y = x^2 + 3$

b. $y = \left(\frac{1}{4}x + 6\right)^3$

c. $y = \sqrt{5x - 6}$

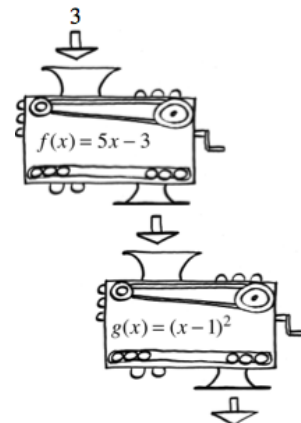
5-33. The function $f(x)$ is represented in the graph at right. Draw a graph of its inverse function. Be sure to state the domain and range for both $f(x)$ and $f^{-1}(x)$.



5-48. Two function machines, $f(x) = 5x - 3$ and $g(x) = (x - 1)^2$, are shown at right.

a. Suppose $f(3)$, (not $x = 3$), is dropped into the $g(x)$ machine. This is written as $g(f(3))$. What is this output?

b. Using the same function machines, what is $f(g(3))$? Be careful! The result is different from the last one because the order in which you use the machines has been switched! With $f(g(3))$, first you find $g(3)$, then you substitute that answer into the machine named $f(x)$.



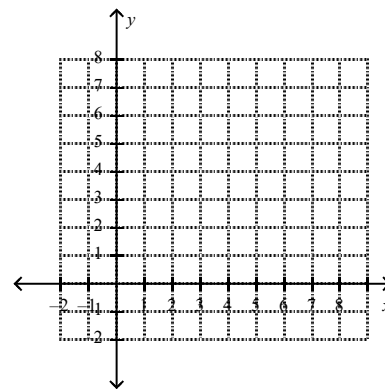
CL 5-127. Given the function : $f(x) = 2 + \sqrt{x-1}$

a. Graph $f(x)$ and state the domain and range.

b. Determine the equation for $f^{-1}(x)$, that is, the inverse of $f(x)$.

c. Graph $f^{-1}(x)$ using the appropriate new domain and range.

d. Compute $f^{-1}(f(5))$ and $f(f^{-1}(5))$ to show that your answer is correct.



5-74. Every exponential equation has an equivalent logarithmic form and every logarithmic equation has an equivalent exponential form. For example,

$$\begin{array}{c}
 \text{exponent} \\
 \downarrow \\
 4^3 = 64 \\
 \uparrow \\
 \text{base}
 \end{array}
 \text{ is equivalent to }
 \begin{array}{ccc}
 3 = \log_4 64 \\
 \uparrow \quad \uparrow \\
 \text{exponent} \quad \text{base}
 \end{array}$$

Copy the table shown below and fill in the missing form in each row.

	Exponential Form	Logarithmic Form
a.	$y = 5^x$	
b.		$y = \log_7(x)$
c.	$8^x = y$	
d.	$A^K = C$	
e.		$K = \log_A(C)$
f.		$\log_{1/2}(K) = N$

5-97. Copy these equations and solve for x. You should be able to do all these problems without a calculator.

a. $\log_x(25) = 1$

b. $x = \log_3(9)$

c. $3 = \log_7(x)$

d. $\log_3(x) = \frac{1}{2}$

e. $3 = \log_x(27)$

f. $\log_{10}(10000) = x$

5-49. This problem is a checkpoint for multiplying polynomials. It will be referred to as Checkpoint 5A. Multiply and simplify each expression below.

a. $(x + 1)(2x^2 - 3)$

b. $(x + 1)(x^2 - 2x + 3)$

c. $2(x + 3)^2$

5-66. Factor each expression completely.

a. $x^2 - 49$

b. $6x^2 + 48x$

c. $x^2 - x - 72$

6-141. If $f(x) = x^4$ and $g(x) = 3(x + 2)$, find the value of each expression below.

a. $f(2)$

b. $g(2)$

c. $f(g(2))$

d. $g(f(2))$

e. Are $f(x)$ and $g(x)$ inverses of each other? Justify your answer.

5.G *Transforming the family logarithmic functions.*

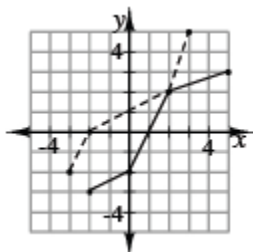
Given the equation $g(x) = \log_2(x - 3) + 5$, how does this transform the graph of $f(x) = \log_2 x$?

Chapter 5 Final Exam Review – Answers

5-27. a. $y = \frac{(x+8)}{3}$ b. $y = 2(x-6)$ $y = 2x - 6$

5-51. a. $y = \pm\sqrt{x-3}$ b. $y = 4(\sqrt[3]{x} - 6)$ c. $y = \frac{x^2+6}{5}$

5-33.



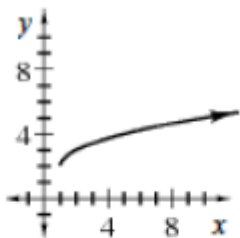
5-48.

a. 121

b. 17

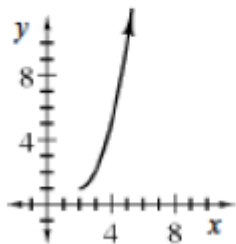
CL 5-127

a. domain $x \geq 1$; range $y \geq 2$



b. $f^{-1}(x) = (x-2)^2 + 1$

c. domain $x \geq 2$; range $y \geq 1$



d. $f^{-1}(f(5)) = f(f^{-1}(5)) = 5$

6-141. See below:

a. 16 b. 12 c. $12^4 = 20736$ d. 54

e. No, they are not inverses (if they were, then the answers to parts (c) and (d) would have to be 2).

5-74. See below:

- $x = \log_5(y)$
- $x = 7^y$
- $x = \log_8(y)$
- $K = \log_A(C)$
- $C = A^K$
- $K = (\frac{1}{2})^N$

5-97. See below:

1. $x = 25$
2. $x = 2$
3. $x = 343$
4. $x = \sqrt{3}$
5. $x = 3$
6. $x = 4$

5-49. See below:

1. $2x^3 + 2x^2 - 3x - 3$
2. $x^3 - x^2 + x + 3$
3. $2x^2 + 12x + 18$

5-66. See below:

1. $(x+7)(x-7)$
2. $6x(x+8)$
3. $(x-9)(x+8)$

5G. Shifts the graph of $f(x)$ right three and up 5.